

## Chapter 10 Exercise 10A

The answers given on page 261. No solutions necessary.

### Exercise 10B

**Q. 1.** (i)  $s_y = u \sin \alpha t - \frac{1}{2}g \cos \beta t^2 = 0$

$$\Rightarrow t = 0 \quad \text{OR} \quad t = \frac{2u \sin \alpha}{g \cos \beta}$$

= time of flight

(ii)  $v_y = 0 \Rightarrow u \sin \alpha - g \cos \beta t = 0$

$$\Rightarrow t = \frac{u \sin \alpha}{g \cos \beta} = \frac{1}{2} \quad (\text{time of flight})$$

**Q. 2.**  $v_x = u \cos 45^\circ - gt \sin 30^\circ = \frac{u}{\sqrt{2}} - \frac{gt}{2}$

$$v_y = u \sin 45^\circ - gt \cos 30^\circ = \frac{u}{\sqrt{2}} - \frac{gt\sqrt{3}}{2}$$

$$s_x = ut \cos 45^\circ - \frac{1}{2}gt^2 \sin 30^\circ = \frac{ut}{\sqrt{2}} - \frac{gt^2}{4}$$

$$s_y = ut \sin 45^\circ - \frac{1}{2}gt^2 \cos 30^\circ = \frac{ut}{\sqrt{2}} - \frac{gt^2\sqrt{3}}{4}$$

Range:  $s_x$  when  $s_y = 0$

$$\frac{ut}{\sqrt{2}} - \frac{gt^2\sqrt{3}}{4} = 0 \quad \dots \text{ multiply by } 4\sqrt{2}$$

$$\Rightarrow 4ut - gt^2\sqrt{6} = 0$$

$$\Rightarrow t(4u - gt\sqrt{6}) = 0$$

$$\Rightarrow t = 0 \quad t = \frac{4u}{g\sqrt{6}} \quad \dots \text{ substitute into } s_x$$

Point of Projection
Time of flight

$$\Rightarrow \text{Range} = \frac{u}{\sqrt{2}} \left[ \frac{4u}{g\sqrt{6}} \right] - \frac{g}{4} \left[ \frac{16u^2}{6g^2} \right]$$

$$\Rightarrow \text{Range} = \frac{4u^2}{g\sqrt{12}} - \frac{2u^2}{3g} = \frac{2u^2}{g\sqrt{3}} - \frac{2u^2}{3g}$$

$$= \frac{2u^2\sqrt{3} - 2u^2}{3g}$$

$$\Rightarrow \text{Range} = \frac{2u^2(\sqrt{3} - 1)}{3g}$$

Maximum perpendicular height:

$s_y$  when  $v_y = 0$

$$\frac{u}{\sqrt{2}} - \frac{gt\sqrt{3}}{2} = 0 \quad \dots \text{ multiply by } 2$$

$$\Rightarrow u\sqrt{2} - gt\sqrt{3} = 0$$

$$\Rightarrow t = \frac{u\sqrt{2}}{g\sqrt{3}} \quad \dots \text{ substitute into } s_y$$

$\Rightarrow$  Maximum perpendicular height

$$= \frac{u}{\sqrt{2}} \left[ \frac{u\sqrt{2}}{g\sqrt{3}} \right] - \frac{g\sqrt{3}}{4} \left[ \frac{2u^2}{3g^2} \right]$$

$$= \frac{u^2}{g\sqrt{3}} - \frac{u^2}{2g\sqrt{3}}$$

$$= \frac{2u^2 - u^2}{2g\sqrt{3}}$$

$$= \frac{u^2}{2g\sqrt{3}} \times \frac{\sqrt{3}}{\sqrt{3}}$$

$$= \frac{\sqrt{3}u^2}{6g}$$

**Q. 3.**  $\cos \alpha = \frac{4}{5}$

$$\sin \alpha = \frac{3}{5}$$

$$\cos \beta = \frac{12}{13}$$

$$\sin \beta = \frac{5}{13}$$

$$s_y = 0$$

$$\Rightarrow 10 \sin \alpha t - \frac{1}{2}g \cos \beta t^2 = 0$$

$$\Rightarrow 6t - \frac{6}{13}gt^2 = 0$$

$$\Rightarrow t = 0 \quad \text{OR} \quad t = \frac{13}{g} = \text{time of flight}$$

$$\text{At } t = \frac{13}{g}, s_x = 10 \cos \alpha t - \frac{1}{2}g \sin \beta t^2$$

$$= 10 \left( \frac{4}{5} \right) \left( \frac{13}{g} \right) - \frac{1}{2}g \left( \frac{5}{13} \right) \left( \frac{169}{g^2} \right)$$

$$= \frac{143}{2g} = R, \text{ the range}$$

$$\frac{2}{5} \text{ths of the time of flight} = \frac{2}{5} \times \frac{13}{g} = \frac{26}{5g}$$

$$\text{At } t = \frac{26}{5g}, s_x = 10 \left( \frac{4}{5} \right) \left( \frac{26}{5g} \right) - \frac{1}{2}g \left( \frac{5}{13} \right) \left( \frac{676}{25g^2} \right)$$

$$= \frac{208}{5g} - \frac{26}{5g} = \frac{182}{5g}$$

$$\text{Now, } \frac{182}{5g} = \frac{28}{55} \left( \frac{143}{2g} \right) = \frac{28}{55}R$$

**Q. 4.**  $s_y = 10 \sin(\alpha - 30^\circ)t - \frac{1}{2} \cos 30^\circ gt^2$

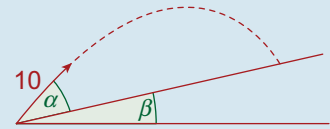
$$s_x = 10 \cos(\alpha - 30^\circ)t - \frac{1}{2} \sin 30^\circ gt^2$$

(i) If  $\alpha = 75^\circ$ ,

$$s_y = 10 \sin 45^\circ t - \frac{1}{2} \cos 30^\circ gt^2 = 0$$

$$\Rightarrow \frac{10}{\sqrt{2}}t - \frac{\sqrt{3}}{4}gt^2 = 0$$

$$\Rightarrow t = 0 \quad \text{OR} \quad t = \frac{40}{\sqrt{6}g}$$



$$\text{At } t = \frac{40}{\sqrt{6g}},$$

$$\begin{aligned} s_x &= 10 \left( \frac{1}{\sqrt{2}} \right) \left( \frac{40}{\sqrt{6g}} \right) - \frac{1}{2} \left( \frac{1}{2} \right) g \left( \frac{1,600}{6g} \right) \\ &= \frac{200}{\sqrt{3g}} - \frac{200}{3g} \\ &= \frac{200(\sqrt{3} - 1)}{3g} \end{aligned}$$

(ii) If  $\alpha = 60^\circ$ ,

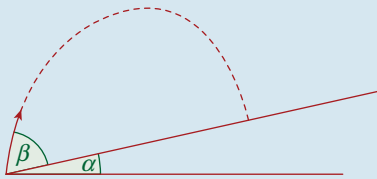
$$\begin{aligned} s_y &= 10 \sin 30^\circ t - \frac{1}{2} \cos 30^\circ g t^2 = 0 \\ &\Rightarrow \frac{10}{\sqrt{2}} t - \frac{\sqrt{3}}{4} g t^2 = 0 \\ &\Rightarrow t = 0 \quad \text{OR} \quad t = \frac{20}{\sqrt{3g}} \end{aligned}$$

$$\text{At } t = \frac{20}{\sqrt{3g}},$$

$$\begin{aligned} s_x &= 10 \left( \frac{\sqrt{3}}{2} \right) \left( \frac{20}{\sqrt{3g}} \right) - \frac{1}{2} \left( \frac{1}{2} \right) g \left( \frac{400}{3g} \right) \\ &= \frac{10,000}{g^2} - \frac{100}{3g} = \frac{200}{3g} \end{aligned}$$

**Q. 5.**  $\tan^{-1} 2 = \cos^{-1} \frac{1}{\sqrt{5}} = \sin^{-1} \frac{2}{\sqrt{5}}$ ,

$$\vec{u} = 7\vec{i} + 14\vec{j}$$



Taking the horizontal as the x-axis.

$$\begin{aligned} v_y = 0 &\Rightarrow 14 - \frac{1}{2} g t = 0 \\ &\Rightarrow t = \frac{28}{g} \text{ seconds} \end{aligned}$$

= time to reach greatest height above the horizontal.

Now taking the line of greatest slope as the

x-axis,  $\vec{u} = u \cos(\beta - \alpha)\vec{i} + u \sin(\beta - \alpha)\vec{j}$

$$\begin{aligned} \text{But, } \cos(\beta - \alpha) &= \cos \beta \cos \alpha + \sin \beta \sin \alpha \\ &= \frac{1}{\sqrt{5}} \cdot \frac{2}{\sqrt{5}} + \frac{2}{\sqrt{5}} \cdot \frac{1}{\sqrt{5}} = \frac{4}{5} \end{aligned}$$

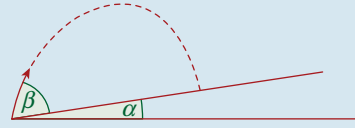
$$\text{Therefore, } \sin(\beta - \alpha) = \frac{3}{5}$$

$$\begin{aligned} v_y = 0 &\Rightarrow u \sin(\beta - \alpha) - \frac{1}{2} g \cos \alpha t = 0 \\ &\Rightarrow 7\sqrt{5} \left( \frac{3}{5} \right) - \frac{1}{2} g \left( \frac{2}{\sqrt{5}} \right) t = 0 \\ &\Rightarrow \frac{21\sqrt{5}}{5} - \frac{\sqrt{5}}{5} g t = 0 \\ &\Rightarrow t = \frac{21}{g} \text{ seconds} \end{aligned}$$

$$\text{The ratio } t_1 : t_2 = \frac{28}{g} : \frac{21}{g} = 4 : 3$$

**Q. 6.**  $\sin \alpha = \frac{5}{13}$ ;  $\cos \alpha = \frac{12}{13}$

$$\sin \beta = \frac{4}{5}$$
;  $\cos \beta = \frac{3}{5}$



$$\begin{aligned} s_x &= u \cos \beta t - \frac{1}{2} g \sin \alpha t^2 \\ &= 10 \left( \frac{3}{5} \right) t - \frac{1}{2} g \left( \frac{5}{13} \right) t^2 \\ &= 6t - \frac{5}{26} g t^2 \end{aligned}$$

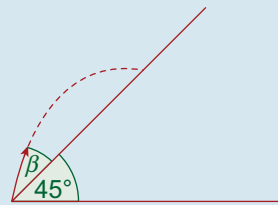
$$\begin{aligned} s_y &= u \sin \beta t - \frac{1}{2} g \cos \alpha t^2 \\ &= 10 \left( \frac{4}{5} \right) t - \frac{1}{2} g \left( \frac{12}{13} \right) t^2 \\ &= 8t - \frac{6}{13} g t^2 \end{aligned}$$

$$s_x = 2s_y \Rightarrow 6t - \frac{5}{26} g t^2 = 2 \left( 8t - \frac{6}{13} g t^2 \right)$$

$$\Rightarrow \frac{19}{26} g t^2 - 10t = 0$$

$$\Rightarrow t = 0 \quad \text{OR} \quad t = \frac{260}{19g}$$

**Q. 7.**  $\sin \beta = \frac{1}{\sqrt{5}}$ ;  $\cos \beta = \frac{2}{\sqrt{5}}$



$$\begin{aligned} s_y = 0 &\Rightarrow u \sin \beta t - \frac{1}{2} g \cos 45^\circ t^2 = 0 \\ &\Rightarrow 4t - \frac{1}{2\sqrt{2}} g t^2 = 0 \end{aligned}$$

$$\Rightarrow t = 0 \quad \text{OR} \quad t = \frac{8\sqrt{2}}{g} = \text{time of flight}$$

$$v_x = u \cos \beta - g \sin 45^\circ t = 8 - \frac{g}{\sqrt{2}} t$$

$$\begin{aligned} \text{At } t = \frac{8\sqrt{2}}{g}, v_x &= 8 - \frac{g}{\sqrt{2}} \left( \frac{8\sqrt{2}}{g} \right) \\ &= 8 - 8 = 0 \text{ m/s} \end{aligned}$$

$$v_y = u \sin \beta - g \cos 45^\circ t = 4 - \frac{g}{\sqrt{2}} t$$

$$\begin{aligned} \text{At } t = \frac{8\sqrt{2}}{g}, v_y &= 4 - \frac{g}{\sqrt{2}} \left( \frac{8\sqrt{2}}{g} \right) \\ &= 4 - 8 = -4 \text{ m/s} \end{aligned}$$

$$v = \sqrt{v_x^2 + v_y^2} = \sqrt{0 + 16} = 4 \text{ m/s}$$

**Q. 8.** (i)  $s_y = 0 \Rightarrow \sqrt{26} \sin \alpha t - \frac{1}{2}g\left(\frac{5}{\sqrt{26}}\right)t^2 = 0$

$$\Rightarrow t = 0 \quad \text{OR} \quad t = \frac{52 \sin \alpha}{5g}$$

(ii)  $s_x = \sqrt{26} \cos \alpha t - \frac{1}{2}g\left(\frac{1}{\sqrt{26}}\right)t^2$

At  $t = \frac{52 \sin \alpha}{5g}$ ,

$$s_x = \sqrt{26} \cos \alpha \left(\frac{52 \sin \alpha}{5g}\right) - \frac{1}{2}g\left(\frac{1}{\sqrt{26}}\right)\left(\frac{2,704 \sin^2 \alpha}{25g^2}\right)$$

$$= \frac{52\sqrt{26} \sin \alpha \cos \alpha}{5g} - \frac{52\sqrt{26} \sin^2 \alpha}{25g}$$

$$= \frac{52\sqrt{26} \sin \alpha}{25g}(5 \cos \alpha - \sin \alpha) = \text{the range}$$

(iii) If  $\alpha = \beta$  then  $\sin \alpha = \sin \beta = \frac{1}{\sqrt{26}}$ ;  $\cos \alpha = \frac{5}{\sqrt{26}}$ .

$$\therefore \text{The range} = \frac{52\sqrt{26}\left(\frac{1}{\sqrt{26}}\right)}{25g}\left(\frac{25}{\sqrt{26}} - \frac{1}{\sqrt{26}}\right)$$

$$= \frac{48\sqrt{26}}{25g}$$

(iv) If  $\alpha = 2\beta$ , then  $\sin \alpha = \sin 2\beta$

$$= 2 \sin \beta \cos \beta$$

$$= 2\left(\frac{1}{\sqrt{26}}\right)\left(\frac{5}{\sqrt{26}}\right)$$

$$= \frac{5}{13}$$

Also,  $\cos \alpha = \cos 2\beta = \cos^2 \beta - \sin^2 \beta$

$$= \frac{25}{26} - \frac{1}{26}$$

$$= \frac{12}{13}$$

$$\therefore \text{The range} = \frac{52\sqrt{26}\left(\frac{5}{13}\right)}{25g}\left(\frac{60}{13} - \frac{5}{13}\right)$$

$$= \frac{44\sqrt{26}}{13g}$$

**Q. 9.**  $v_x = u \cos \alpha + gt \sin \beta$

$$v_y = u \sin \alpha - gt \cos \beta$$

$$s_x = ut \cos \alpha + \frac{1}{2}gt^2 \sin \beta$$

$$s_y = ut \sin \alpha - \frac{1}{2}gt^2 \cos \beta$$

Range:  $s_x$  when  $s_y = 0$

$$s_y = 0$$

$$\Rightarrow ut \sin \alpha - \frac{1}{2}gt^2 \cos \beta = 0 \quad \dots \text{multiply by 2}$$

$$\Rightarrow 2ut \sin \alpha - gt^2 \cos \beta = 0$$

$$\Rightarrow t(2u \sin \alpha - gt \cos \beta) = 0$$

$$\Rightarrow t = 0 \quad t = \frac{2u \sin \alpha}{g \cos \beta}$$

Point of Projection
Time of Flight

$$\begin{aligned} \text{Range} &= s_x \text{ when } t = \frac{2u \sin \alpha}{g \cos \beta} \\ \Rightarrow R &= u \left[ \frac{2u \sin \alpha}{g \cos \beta} \right] \cos \alpha + \frac{1}{2} g \left[ \frac{4u^2 \sin^2 \alpha}{g^2 \cos^2 \beta} \right] \sin \beta \\ \Rightarrow R &= \frac{2u^2 \sin \alpha \cos \alpha}{g \cos \beta} + \frac{2u^2 \sin^2 \alpha \sin \beta}{g \cos^2 \beta} \\ \Rightarrow R &= \frac{2u^2 \sin \alpha}{g \cos \beta} \left[ \cos \alpha + \frac{\sin \alpha \sin \beta}{\cos \beta} \right] \\ \Rightarrow R &= \frac{2u^2 \sin \alpha}{g \cos \beta} \left[ \frac{\cos \alpha \cos \beta + \sin \alpha \sin \beta}{\cos \beta} \right] \\ &\quad \dots \cos A \cos B + \sin A \sin B = \cos(A - B) \\ \Rightarrow R &= \frac{2u^2}{g \cos^2 \beta} [\sin \alpha \cos(\alpha - \beta)] \\ &\quad \dots 2 \sin A \cos B = \sin(A + B) + \sin(A - B) \\ \Rightarrow \sin A \cos B &= \frac{1}{2} [\sin(A + B) + \sin(A - B)] \\ \Rightarrow R &= \frac{2u^2}{g \cos^2 \beta} \left\{ \frac{1}{2} [\sin(2\alpha - \beta) + \sin \beta] \right\} \\ \Rightarrow R &= \frac{u^2}{g \cos^2 \beta} [\sin(2\alpha - \beta) + \sin \beta] \\ &\quad \dots \text{as required} \end{aligned}$$

In this equation,  $u$ ,  $g$  and  $\beta$  are fixed. Only  $\alpha$ , the angle at which the projectile is fired, can vary.

The maximum value for the above expression is where  $\sin(2\alpha - \beta) = 1$

$$\Rightarrow 2\alpha - \beta = 90^\circ$$

$$\Rightarrow \alpha = \frac{\beta + 90^\circ}{2}$$

Also, if  $\sin(2\alpha - \beta) = 1$ , then

$$R_{\max} = \frac{u^2}{g \cos^2 \beta} [1 + \sin \beta]$$

$$\Rightarrow R_{\max} = \frac{u^2}{g(1 - \sin^2 \beta)} [1 + \sin \beta]$$

$$\Rightarrow R_{\max} = \frac{u^2}{g(1 - \sin \beta)(1 + \sin \beta)} [1 + \sin \beta]$$

$$\Rightarrow R_{\max} = \frac{u^2}{g(1 - \sin \beta)}$$

$$(i) \beta = 20^\circ \Rightarrow \alpha = \frac{20^\circ + 90^\circ}{2} = 55^\circ$$

$$(ii) \beta = 0^\circ \Rightarrow \alpha = \frac{0^\circ + 90^\circ}{2} = 45^\circ$$

**Q. 10.**  $v_x = u \cos \theta - gt \sin \alpha$

$$v_y = u \sin \theta - gt \cos \alpha$$

$$s_x = ut \cos \theta - \frac{1}{2}gt^2 \sin \alpha$$

$$s_y = ut \sin \theta - \frac{1}{2}gt^2 \cos \alpha$$

(i) For time of flight, let  $s_y = 0$

$$\Rightarrow ut \sin \theta - \frac{1}{2}gt^2 \cos \alpha = 0$$

$$\Rightarrow 2ut \sin \theta - gt^2 \cos \alpha = 0$$

$$\Rightarrow t(2u \sin \theta - gt \cos \alpha) = 0$$

$$\Rightarrow t = 0 \quad t = \frac{2u \sin \theta}{g \cos \alpha}$$

Point of Projection                      Time of Flight

(ii) Range:  $s_x$  when  $t = \frac{2u \sin \theta}{g \cos \alpha}$

$$\Rightarrow \text{Range} = u \left[ \frac{2u \sin \theta}{g \cos \alpha} \right] \cos \theta - \frac{1}{2}g \left[ \frac{4u^2 \sin^2 \theta}{g^2 \cos^2 \alpha} \right] \sin \alpha$$

$$\Rightarrow \text{Range} = \frac{2u^2 \sin \theta \cos \theta}{g \cos \alpha} - \frac{2u^2 \sin^2 \theta \sin \alpha}{g \cos^2 \alpha}$$

$$\Rightarrow \text{Range} = \frac{2u^2 \sin \theta \cos \theta \cos \alpha - 2u^2 \sin^2 \theta \sin \alpha}{g \cos^2 \alpha}$$

$$\Rightarrow \text{Range} = \frac{2u^2 \sin \theta [\cos \theta \cos \alpha - \sin \theta \sin \alpha]}{g \cos^2 \alpha}$$

$$\Rightarrow \text{Range} = \frac{2u^2 \sin \theta [\cos(\theta + \alpha)]}{g \cos^2 \alpha}$$

$$\Rightarrow \text{Range} = \frac{u^2[\sin(2\theta + \alpha) + \sin(-\alpha)]}{g \cos^2 \alpha}$$

$$\Rightarrow \text{Range} = \frac{u^2[\sin(2\theta + \alpha) - \sin \alpha]}{g \cos^2 \alpha}$$

Everything is fixed except  $\theta$ . Therefore, maximum range occurs when  $\sin(2\theta + \alpha) = 1$

$$\Rightarrow 2\theta + \alpha = \frac{\pi}{2}$$

$$\Rightarrow 2\theta = \frac{\pi}{2} - \alpha$$

$$\Rightarrow \theta = \frac{1}{2} \left( \frac{\pi}{2} - \alpha \right)$$

### Exercise 10C

**Q. 1.**  $s_y = 0 \Rightarrow u \sin(\alpha - \beta)t - \frac{1}{2}gt \cos \beta t^2 = 0$

$$\Rightarrow t = 0 \quad \text{OR} \quad t = \frac{2u \sin(\alpha - \beta)}{g \cos \beta}$$

Now,  $v_x = u \cos(\alpha - \beta) - g \sin \beta t$

But  $v_x = 0$  at  $t = \frac{2u \sin(\alpha - \beta)}{g \cos \beta}$

$$\therefore u \cos(\alpha - \beta) - g \sin \beta \left( \frac{2u \sin(\alpha - \beta)}{g \cos \beta} \right) = 0$$

Divide by  $u \cos(\alpha - \beta)$ .

$$= 1 - 2 \tan(\alpha - \beta) \tan \beta = 0$$

$$\Rightarrow 2 \tan(\alpha - \beta) \tan \beta = 1$$

If  $(\alpha - \beta) = \frac{\pi}{4}$ , then  $\tan(\alpha - \beta) = 1$

and hence  $2 \tan \beta = 1$

$$\Rightarrow \tan \beta = \frac{1}{2}$$

$$\Rightarrow \sin \beta = \frac{1}{\sqrt{5}} \text{ and } \cos \beta = \frac{2}{\sqrt{5}}$$

In this case  $t = \frac{2u \sin(\alpha - \beta)}{g \cos \beta}$

$$\Rightarrow t = \frac{2u \left( \frac{1}{\sqrt{2}} \right)}{g \left( \frac{2}{\sqrt{5}} \right)} = \frac{\sqrt{5}u}{\sqrt{2}g}$$

$$s_x = u \cos(\alpha - \beta)t - \frac{1}{3}g \sin \beta t^2.$$

At  $t = \frac{\sqrt{5}u}{\sqrt{2}g}$ ,

$$s_x = u \left( \frac{1}{\sqrt{2}} \right) \left( \frac{\sqrt{5}u}{\sqrt{2}g} \right) - \frac{1}{2}g \left( \frac{1}{\sqrt{5}} \right) \left( \frac{5u^2}{2g^2} \right)$$

$$= \frac{\sqrt{5}u^2}{2g} - \frac{\sqrt{5}u^2}{4g}$$

$$= \frac{\sqrt{5}u^2}{4g} = \text{Range}$$

**Q. 2.**  $v_x = u \cos 30^\circ - gt \sin 30^\circ = \frac{u\sqrt{3}}{2} - \frac{gt}{2}$

$$v_y = u \cos 30^\circ - gt \cos 30^\circ = \frac{u}{2} - \frac{gt\sqrt{3}}{2}$$

$$s_x = ut \cos 30^\circ - \frac{1}{2}gt^2 \sin 30^\circ = \frac{ut\sqrt{3}}{2} - \frac{gt^2}{4}$$

$$s_y = ut \sin 30^\circ - \frac{1}{2}gt^2 \cos 30^\circ = \frac{ut}{2} - \frac{gt^2\sqrt{3}}{4}$$

For landing angle, need  $v_x$  and  $v_y$  when

$$s_y = 0$$

$$\frac{ut}{2} - \frac{gt^2\sqrt{3}}{4} = 0 \quad \dots \text{multiply by 4}$$

$$\Rightarrow 2ut - gt^2\sqrt{3} = 0$$

$$\Rightarrow t(2u - gt\sqrt{3}) = 0$$

$$\Rightarrow t = 0 \quad t = \frac{2u}{g\sqrt{3}}$$

Point of Projection                      Time of Flight

$$v_x = \frac{u\sqrt{3}}{2} - \frac{g}{2} \left[ \frac{2u}{g\sqrt{3}} \right] = \frac{u\sqrt{3}}{2} - \frac{u}{\sqrt{3}}$$

$$= \frac{3u - 2u}{2\sqrt{3}}$$

$$= \frac{u}{2\sqrt{3}}$$

$$v_y = \frac{u}{2} - \frac{g\sqrt{3}}{2} \left[ \frac{2u}{g\sqrt{3}} \right] = \frac{u}{2} - u = -\frac{u}{2}$$

Let landing angle =  $\theta$

$$\tan \theta = -\frac{v_y}{v_x} = \frac{u}{2} \times \frac{2\sqrt{3}}{u} = \sqrt{3}$$

$$\Rightarrow \theta = \tan^{-1} \sqrt{3} = 60^\circ$$

**Q. 3.**  $s_y = 0 \Rightarrow u \sin(\alpha - 45^\circ)t - \frac{1}{2}gt \cos 45^\circ t^2 = 0$

$$\Rightarrow u \sin(\alpha - 45^\circ)t - \frac{1}{2\sqrt{2}}gt^2 = 0$$

$$\Rightarrow t = 0 \quad \text{OR} \quad t = \frac{2\sqrt{2}u \sin(\alpha - 45^\circ)}{g}$$

= time of flight

$$v_y = u \sin(\alpha - 45^\circ) - \frac{g}{\sqrt{2}}t$$

At time of flight,

$$v_y = u \sin(\alpha - 45^\circ) - \frac{g}{2} \left( \frac{2\sqrt{2}u \sin(\alpha - 45^\circ)}{g} \right)$$

$$= -u \sin(\alpha - 45^\circ)$$

$$v_x = u \cos(\alpha - 45^\circ) - \frac{g}{\sqrt{2}}t$$

At time of flight,

$$v_x = u \cos(\alpha - 45^\circ) - \frac{g}{\sqrt{2}} \left( \frac{2\sqrt{2}u \sin(\alpha - 45^\circ)}{g} \right)$$

$$= u \cos(\alpha - 45^\circ) - 2u \sin(\alpha - 45^\circ)$$

$$\tan \beta = \frac{-v_y}{v_x}$$

$$= \frac{u \sin(\alpha - 45^\circ)}{u \cos(\alpha - 45^\circ) - 2u \sin(\alpha - 45^\circ)}$$

$$= \frac{\tan(\alpha - 45^\circ)}{1 - 2 \tan(\alpha - 45^\circ)}$$

But  $\tan(\alpha - 45^\circ) = \frac{\tan \alpha - \tan 45^\circ}{1 + \tan \alpha \tan 45^\circ}$

$$= \frac{\tan \alpha - 1}{1 + \tan \alpha}$$

$$\therefore \tan \beta = \frac{\frac{\tan \alpha - 1}{1 + \tan \alpha}}{1 - 2 \left( \frac{\tan \alpha - 1}{1 + \tan \alpha} \right)}$$

$$= \frac{\tan \alpha - 1}{1 + \tan \alpha - 2 \tan \alpha + 2}$$

$$= \frac{\tan \alpha - 1}{3 - \tan \alpha}$$

(i) If it lands horizontally, then  $\beta = 45^\circ$

$$\Rightarrow 1 = \frac{\tan \alpha - 1}{3 - \tan \alpha}$$

$$\Rightarrow 3 - \tan \alpha = \tan \alpha - 1$$

$$\Rightarrow \tan \alpha = 2$$

(ii) If it lands vertically, then  $\beta = 90^\circ$

$$\Rightarrow \frac{\tan \alpha - 1}{3 - \tan \alpha} = \text{undefined}$$

$$\therefore 3 - \tan \alpha = 0$$

$$\therefore \tan \alpha = 3$$

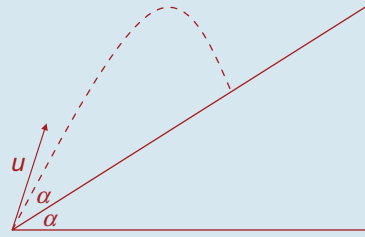
(iii)  $\frac{\tan \alpha - 1}{3 - \tan \alpha} = \frac{1}{3}$

$$\therefore 3 \tan \alpha - 3 = 3 - \tan \alpha$$

$$\therefore 4 \tan \alpha = 6$$

$$\therefore \tan \alpha = \frac{6}{4} = \frac{3}{2}$$

**Q. 4.**



$$\tan \alpha = \frac{1}{\sqrt{2}} \Rightarrow \cos \alpha = \frac{\sqrt{2}}{\sqrt{3}} \text{ and } \sin \alpha = \frac{1}{\sqrt{3}}$$

$$v_x = u \cos \alpha - gt \sin \alpha = \frac{u\sqrt{2}}{\sqrt{3}} - \frac{gt}{\sqrt{3}}$$

$$v_y = u \sin \alpha - gt \cos \alpha = \frac{u}{\sqrt{3}} - \frac{gt\sqrt{2}}{\sqrt{3}}$$

$$s_x = ut \cos \alpha - \frac{1}{2}gt^2 \sin \alpha = \frac{ut\sqrt{2}}{\sqrt{3}} - \frac{gt^2}{2\sqrt{3}}$$

$$s_y = ut \sin \alpha - \frac{1}{2}gt^2 \cos \alpha = \frac{ut}{\sqrt{3}} - \frac{gt^2\sqrt{2}}{2\sqrt{3}}$$

(i) Lands at right angles if  $v_x = 0$  when

$$s_y = 0$$

$$\Rightarrow \frac{ut}{\sqrt{3}} - \frac{gt^2\sqrt{2}}{2\sqrt{3}} = 0$$

$$\Rightarrow 2ut - gt^2\sqrt{2} = 0$$

$$\Rightarrow t(2u - gt\sqrt{2}) = 0$$

$$\Rightarrow t = 0 \quad \text{Point of Projection}$$

$$t = \frac{2u}{g\sqrt{2}} = \frac{u\sqrt{2}}{g} \quad \text{Time of Flight}$$

$$v_x = \frac{u\sqrt{2}}{\sqrt{3}} - \frac{g}{\sqrt{3}} \left[ \frac{u\sqrt{2}}{g} \right]$$

$$\Rightarrow v_x = \frac{u\sqrt{2}}{\sqrt{3}} - \frac{u\sqrt{2}}{\sqrt{3}} = 0$$

$\Rightarrow$  Strikes plane at right angles

(ii) Range: Find  $s_x$  when  $t = \frac{u\sqrt{2}}{g}$

$$\Rightarrow \text{Range} = \frac{u\sqrt{2}}{\sqrt{3}} \left[ \frac{u\sqrt{2}}{g} \right] - \frac{g}{2\sqrt{3}} \left[ \frac{2u^2}{g^2} \right]$$

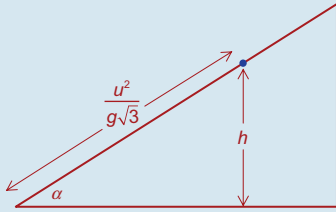
$$\Rightarrow \text{Range} = \frac{2u^2}{g\sqrt{3}} - \frac{u^2}{g\sqrt{3}} = \frac{u^2}{g\sqrt{3}}$$

(iii) Total Energy in the beginning =  $\frac{1}{2}mu^2$

Total Energy at point of landing

$$= \frac{1}{2}mv^2 + mgh$$

... where  $h$  = height above take-off position



$$\sin \alpha = \frac{h}{\frac{u^2}{g\sqrt{3}}} = h \left( \frac{g\sqrt{3}}{u^2} \right)$$

$$\Rightarrow \frac{1}{\sqrt{3}} = h \left( \frac{g\sqrt{3}}{u^2} \right)$$

$$\Rightarrow 3gh = u^2$$

$$\Rightarrow h = \frac{u^2}{3g}$$

Velocity at landing is  $v_y$  when  $t = \frac{u\sqrt{2}}{g}$

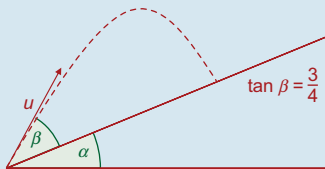
since  $v_x = 0$  at landing

$$\begin{aligned} \Rightarrow v &= \frac{u}{\sqrt{3}} - \frac{g\sqrt{2}}{\sqrt{3}} \left[ \frac{u\sqrt{2}}{g} \right] = \frac{u}{\sqrt{3}} - \frac{2u}{\sqrt{3}} \\ &= -\frac{u}{\sqrt{3}} \end{aligned}$$

$\Rightarrow$  Total Energy at landing

$$\begin{aligned} &= \underbrace{\frac{1}{2}m \left[ -\frac{u}{\sqrt{3}} \right]^2}_{\text{Kinetic Energy}} + \underbrace{mg \left[ \frac{u^2}{3g} \right]}_{\text{Potential Energy}} \\ &= \frac{mu^2}{6} + \frac{mu^2}{3} = \frac{1}{2}mu^2 \end{aligned}$$

Q. 5.



$$\tan \alpha = \frac{3}{4}, \tan \beta = \frac{1}{2}$$

To prove:  $\tan \theta = 2$

$$u_x = u \cos \beta$$

$$u_y = u \sin \beta$$

$$a_x = -g \sin \alpha$$

$$a_y = -g \cos \alpha$$

$$\therefore v_x = u \cos \beta - g \sin \alpha t$$

$$v_y = u \sin \beta - g \cos \alpha t$$

$$s_x = u \cos \beta t - \frac{1}{2} g \sin \alpha t^2$$

$$s_y = u \sin \beta t - \frac{1}{2} g \cos \alpha t^2$$

It lands when  $s_y = 0$

$$\Rightarrow u \sin \beta t - \frac{1}{2} g \cos \alpha t^2 = 0$$

$$\Rightarrow t = 0 \quad \text{OR} \quad t = \frac{2u \sin \beta}{g \cos \alpha} = \text{time of flight}$$

$$\text{At this time, } v_x = u \cos \beta - g \sin \alpha \left( \frac{2u \sin \beta}{g \cos \alpha} \right)$$

$$= u \cos \beta - 2u \tan \alpha \sin \beta$$

$$v_y = u \sin \beta - g \cos \alpha \left( \frac{2u \sin \beta}{g \cos \alpha} \right) = -u \sin \beta$$

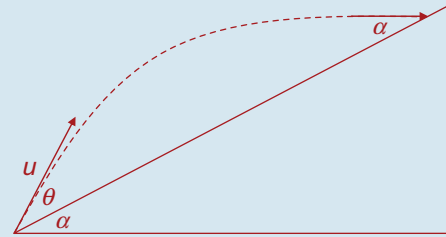
$$\tan \theta = -\frac{v_y}{v_x}$$

$$= \frac{u \sin \beta}{u \cos \beta - 2u \tan \alpha \sin \beta} \quad (\div u \cos \beta)$$

$$= \frac{\tan \beta}{1 - 2 \tan \alpha \tan \beta}$$

$$= \frac{\frac{1}{2}}{1 - 2 \left( \frac{3}{4} \right) \left( \frac{1}{2} \right)} = \frac{\frac{1}{2}}{1 - \frac{3}{4}} = 2 \quad \text{QED.}$$

Q. 6.



$$\tan \alpha = \frac{1}{2} \Rightarrow \cos \alpha = \frac{2}{\sqrt{5}} \text{ and } \sin \alpha = \frac{1}{\sqrt{5}}$$

$$v_x = u \cos \theta - gt \sin \alpha$$

$$= u \cos \theta - \frac{gt}{\sqrt{5}}$$

$$v_y = u \sin \theta - gt \cos \alpha$$

$$= u \sin \theta - \frac{2gt}{\sqrt{5}}$$

$$s_x = ut \cos \theta - \frac{1}{2}gt^2 \sin \alpha$$

$$= ut \cos \theta - \frac{gt^2}{2\sqrt{5}}$$

$$s_y = ut \sin \theta - \frac{1}{2}gt^2 \cos \alpha$$

$$= ut \sin \theta - \frac{gt^2}{\sqrt{5}}$$

For time of flight, let  $s_y = 0$

$$\Rightarrow ut \sin \theta - \frac{gt^2}{\sqrt{5}} = 0 \quad \dots \text{ multiply by } \sqrt{5}$$

$$ut\sqrt{5} \sin \theta - gt^2 = 0$$

$$t(u\sqrt{5} \sin \theta - gt) = 0$$

$$\Rightarrow \underbrace{t = 0}_{\text{Point of Projection}} \qquad t = \frac{u\sqrt{5} \sin \theta}{g} \quad \underbrace{\hspace{10em}}_{\text{Time of Flight}}$$

For landing angle, find  $v_x$  and  $v_y$

when  $t = \frac{u\sqrt{5} \sin \theta}{g}$

$$v_x = u \cos \theta - \frac{g}{\sqrt{5}} \left[ \frac{u\sqrt{5} \sin \theta}{g} \right]$$

$$= u(\cos \theta - \sin \theta)$$

$$v_y = u \sin \theta - \frac{2g}{\sqrt{5}} \left[ \frac{u\sqrt{5} \sin \theta}{g} \right]$$

$$= u \sin \theta - 2u \sin \theta = -u \sin \theta$$

We know that the landing angle is  $\alpha$  where

$$\tan \alpha = \frac{1}{2}$$

We also know that  $\tan \alpha = \frac{-v_y}{v_x}$

$$\Rightarrow \frac{-v_y}{v_x} = \frac{1}{2}$$

$$\Rightarrow \frac{u \sin \theta}{u(\cos \theta - \sin \theta)} = \frac{1}{2}$$

$$\Rightarrow 2 \sin \theta = \cos \theta - \sin \theta$$

$$\Rightarrow 3 \sin \theta = \cos \theta \quad \dots \text{ divide by } \cos \theta$$

$$\Rightarrow 3 \tan \theta = 1$$

$$\Rightarrow \tan \theta = \frac{1}{3} \quad \dots \text{ as required}$$

$\Rightarrow$  Range: Find  $s_x$  when  $t = \frac{u\sqrt{5} \sin \theta}{g}$

$$\Rightarrow \text{Range} = ut \cos \theta - \frac{gt^2}{2\sqrt{5}}$$

$\dots \tan \theta = \frac{1}{3} \Rightarrow \cos \theta = \frac{3}{\sqrt{10}}$  and  $\sin \theta = \frac{1}{\sqrt{10}}$

$\Rightarrow$  Range

$$= u \left[ \frac{u\sqrt{5}}{g} \left( \frac{1}{\sqrt{10}} \right) \right] \left[ \frac{3}{\sqrt{10}} \right] - \frac{g}{2\sqrt{5}} \left[ \frac{5u^2}{g^2} \left( \frac{1}{10} \right) \right]$$

$$\Rightarrow \text{Range} = \frac{3u^2\sqrt{5}}{10g} - \frac{u^2}{4g\sqrt{5}}$$

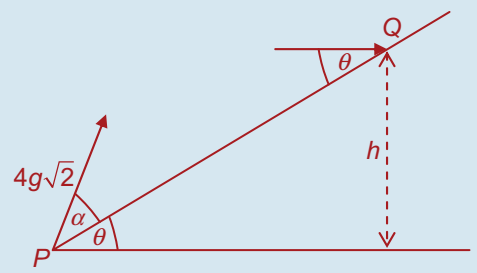
$$\Rightarrow \text{Range} = \frac{30u^2 - 5u^2}{20g\sqrt{5}}$$

$$= \frac{25u^2}{20g\sqrt{5}}$$

$$= \frac{5u^2}{4g\sqrt{5}}$$

$$= \frac{u^2\sqrt{5}}{4g}$$

Q. 7.



$$\tan \alpha = \frac{1}{3} \Rightarrow \cos \alpha = \frac{3}{\sqrt{10}} \text{ and } \sin \alpha = \frac{1}{\sqrt{10}}$$

(a)  $v_x = u \cos \alpha - gt \sin \theta$

$$= 4g\sqrt{2} \left( \frac{3}{\sqrt{10}} \right) - gt \sin \theta$$

$$= \frac{12g}{\sqrt{5}} - gt \sin \theta$$

$$v_y = u \sin \alpha - gt \cos \theta$$

$$= 4g\sqrt{2} \left( \frac{1}{\sqrt{10}} \right) - gt \cos \theta$$

$$= \frac{4g}{\sqrt{5}} - gt \cos \theta$$

$$s_x = ut \cos \alpha - \frac{1}{2}gt^2 \sin \theta$$

$$= 4g\sqrt{2}t \left( \frac{3}{\sqrt{10}} \right) - \frac{1}{2}gt^2 \sin \theta$$

$$= \frac{12gt}{\sqrt{5}} - \frac{1}{2}gt^2 \sin \theta$$

$$s_y = ut \sin \alpha - \frac{1}{2}gt^2 \cos \theta$$

$$= 4g\sqrt{2}t \left( \frac{1}{\sqrt{10}} \right) - \frac{1}{2}gt^2 \cos \theta$$

$$= \frac{4gt}{\sqrt{5}} - \frac{1}{2}gt^2 \cos \theta$$

For landing angle, need  $v_x$  and  $v_y$  when  $s_y = 0$

$$\frac{4gt}{\sqrt{5}} - \frac{1}{2}gt^2 \cos \theta = 0$$

$\dots$  multiply by  $2\sqrt{5}$

$$\Rightarrow 8gt - gt^2\sqrt{5} \cos \theta = 0$$

$\dots$  divide by  $g$

$$\Rightarrow 8t - t^2\sqrt{5} \cos \theta = 0$$

$$t(8 - t\sqrt{5} \cos \theta) = 0$$

$$\Rightarrow t = 0 \qquad t = \frac{8}{\sqrt{5} \cos \theta}$$

$\underbrace{\hspace{10em}}_{\text{Point of Projection}} \qquad \underbrace{\hspace{10em}}_{\text{Time of Flight}}$

$$v_x = \frac{12g}{\sqrt{5}} - g \left[ \frac{8}{\sqrt{5} \cos \theta} \right] \sin \theta$$

$$= \frac{12g}{\sqrt{5}} - \frac{8g \tan \theta}{\sqrt{5}}$$



$$\begin{aligned}
 &= \frac{4g(3 - 2 \tan \theta)}{\sqrt{5}} \\
 v_y &= \frac{4g}{\sqrt{5}} - g \left[ \frac{8}{\sqrt{5} \cos \theta} \right] \cos \theta \\
 &= \frac{4g}{\sqrt{5}} - \frac{8g}{\sqrt{5}} \\
 &= -\frac{4g}{\sqrt{5}} \\
 \tan \theta &= \frac{v_y}{v_x} \\
 &= \frac{4g}{\sqrt{5}} \times \frac{\sqrt{5}}{4g(3 - 2 \tan \theta)} \\
 \Rightarrow \tan \theta &= \frac{1}{3 - 2 \tan \theta} \\
 \Rightarrow 3 \tan \theta - 2 \tan^2 \theta &= 1 \\
 \Rightarrow 2 \tan^2 \theta - 3 \tan \theta + 1 &= 0 \\
 \Rightarrow (2 \tan \theta - 1)(\tan \theta - 1) &= 0 \\
 \Rightarrow \tan \theta &= \frac{1}{2} \quad \text{OR} \quad \tan \theta = 1 \\
 \Rightarrow \theta &= \tan^{-1} \left( \frac{1}{2} \right) \quad \text{OR} \quad \theta = 45^\circ
 \end{aligned}$$

(b) (i) Let  $\tan \theta = 0.5$

$$\begin{aligned}
 \Rightarrow v_x &= \frac{8g}{\sqrt{5}} \quad \text{and} \quad v_y = -\frac{4g}{\sqrt{5}} \\
 \Rightarrow |v| &= \sqrt{\left( \frac{8g}{\sqrt{5}} \right)^2 + \left( -\frac{4g}{\sqrt{5}} \right)^2} \\
 &= \sqrt{\frac{64g^2}{5} + \frac{16g^2}{5}} \\
 &= \sqrt{\frac{80g^2}{5}} \\
 &= \sqrt{16g^2} = 4g \text{ m/s}
 \end{aligned}$$

$$\begin{aligned}
 \text{(ii) Total Energy at } P &= \frac{1}{2} m u^2 \\
 &= \frac{1}{2} m (4g\sqrt{2})^2 \\
 &= \frac{1}{2} m (32g^2) \\
 &= 16mg^2
 \end{aligned}$$

$$\text{Total Energy at } Q = \frac{1}{2} m v^2 + mgh$$

In order to find  $h$ , must firstly find range.

$$\begin{aligned}
 \text{i.e. find } s_x \text{ when } t &= \frac{8}{\sqrt{5} \cos \theta} \\
 &= \frac{8}{\sqrt{5} \left( \frac{2}{\sqrt{5}} \right)} = 4
 \end{aligned}$$

$$\begin{aligned}
 \text{Range} &= \frac{12g(4)}{\sqrt{5}} - \frac{1}{2} g (16) \left( \frac{1}{\sqrt{5}} \right) \\
 &= \frac{48g}{\sqrt{5}} - \frac{8g}{\sqrt{5}}
 \end{aligned}$$

$$\begin{aligned}
 &= \frac{40g}{\sqrt{5}} \\
 &= 8g\sqrt{5} \\
 \sin \theta &= \frac{h}{\text{Range}} \\
 \Rightarrow \frac{1}{\sqrt{5}} &= \frac{h}{8g\sqrt{5}} \\
 \Rightarrow h &= 8g
 \end{aligned}$$

$\Rightarrow$  Total Energy at Q

$$\begin{aligned}
 &= \frac{1}{2} m (4g)^2 + mg(8g) \\
 &= 8mg^2 + 8mg^2 \\
 &= 16mg^2
 \end{aligned}$$

This is the same as the total energy at P.

$$\begin{aligned}
 \text{Q. 8. } v_x &= u \cos \theta - gt \sin \alpha \\
 v_y &= u \cos \theta - gt \cos \alpha \\
 s_x &= ut \cos \theta - \frac{1}{2} g t^2 \sin \alpha \\
 s_y &= ut \sin \theta - \frac{1}{2} g t^2 \cos \alpha
 \end{aligned}$$

For landing angle, need  $v_x$  and  $v_y$  when  $s_y = 0$

$$ut \sin \theta - \frac{1}{2} g t^2 \cos \alpha = 0$$

$$\Rightarrow 2ut \sin \theta - g t^2 \cos \alpha = 0$$

$$\Rightarrow t(2u \sin \theta - g t \cos \alpha) = 0$$

$$\Rightarrow t = 0 \quad t = \frac{2u \sin \theta}{g \cos \alpha}$$

Point of Projection Time of Flight

$$\begin{aligned}
 v_x &= u \cos \theta - g \left[ \frac{2u \sin \theta}{g \cos \alpha} \right] \sin \alpha \\
 &= u \cos \theta - 2u \sin \theta \tan \alpha \\
 &= u(\cos \theta - 2 \sin \theta \tan \alpha)
 \end{aligned}$$

$$\begin{aligned}
 v_y &= u \sin \theta - g \left[ \frac{2u \sin \theta}{g \cos \alpha} \right] \cos \alpha \\
 &= u \sin \theta - 2u \sin \theta \\
 &= -u \sin \theta
 \end{aligned}$$

Lands horizontally

$\Rightarrow$  Landing angle =  $\alpha$

$$\begin{aligned}
 \tan \alpha &= \frac{-v_y}{v_x} \\
 &= \frac{u \sin \theta}{u(\cos \theta - 2 \sin \theta \tan \alpha)}
 \end{aligned}$$

$$\Rightarrow \tan \alpha = \frac{\sin \theta}{\cos \theta - 2 \sin \theta \tan \alpha}$$

$$\Rightarrow \sin \theta = \tan \alpha \cos \theta - 2 \sin \theta \tan^2 \alpha$$

... divide by  $\cos \theta$

$$\Rightarrow \tan \theta = \tan \alpha - 2 \tan \theta \tan^2 \alpha$$

$$\Rightarrow \tan \theta (1 + 2 \tan^2 \alpha) = \tan \alpha$$

$$\Rightarrow \tan \theta = \frac{\tan \alpha}{1 + 2 \tan^2 \alpha}$$

$$\Rightarrow \tan \theta = \frac{\frac{\sin \alpha}{\cos \alpha}}{1 + \frac{2 \sin^2 \alpha}{\cos^2 \alpha}}$$

... multiply top and bottom by  $\cos^2 \alpha$

$$\Rightarrow \tan \theta = \frac{\sin \alpha \cos \alpha}{\cos^2 \alpha + 2 \sin^2 \alpha}$$

$$\Rightarrow \tan \theta = \frac{\sin \alpha \cos \alpha}{\cos^2 \alpha + 2(1 - \cos^2 \alpha)}$$

$$\Rightarrow \tan \theta = \frac{\sin \alpha \cos \alpha}{\cos^2 \alpha + 2 - 2 \cos^2 \alpha}$$

$$\Rightarrow \tan \theta = \frac{\sin \alpha \cos \alpha}{2 - \cos^2 \alpha}$$

**Q. 9.**  $v_x = u \cos \theta - gt \sin 60^\circ$

$$= u \cos \theta - \frac{gt\sqrt{3}}{2}$$

$$v_y = u \sin \theta - gt \cos 60^\circ$$

$$= u \sin(\theta - 60^\circ) - \frac{gt}{2}$$

$$s_x = ut \cos \theta - \frac{1}{2}gt^2 \sin 60^\circ$$

$$= ut \cos \theta - \frac{gt^2\sqrt{3}}{4}$$

$$s_y = ut \sin \theta - \frac{1}{2}gt^2 \cos 60^\circ$$

$$= ut \sin \theta - \frac{gt^2}{4}$$

Maximum Perpendicular Height: Find  $s_y$  when  $v_y = 0$

$$u \sin \theta - \frac{gt}{2} = 0$$

$$\Rightarrow 2u \sin \theta - gt = 0$$

$$\Rightarrow t = \frac{2u \sin \theta}{g}$$

$$\Rightarrow H = u \left[ \frac{2u \sin \theta}{g} \right] \sin \theta - \frac{g}{4} \left[ \frac{4u^2 \sin^2 \theta}{g^2} \right]$$

$$\Rightarrow H = \frac{2u^2 \sin^2 \theta}{g} - \frac{u^2 \sin^2 \theta}{g}$$

$$\Rightarrow H = \frac{u^2 \sin^2 \theta}{g}$$

For the second part of the question, we let  $s_y = H \sin^2 \theta$

$$\Rightarrow ut \sin \theta - \frac{gt^2}{4}$$

$$= \left[ \frac{u^2 \sin^2 \theta}{g} \right] \sin^2 \theta \quad \dots \text{multiply by } 4g$$

$$\Rightarrow 4gut \sin \theta - g^2 t^2 = 4u^2 \sin^4 \theta$$

$$\Rightarrow g^2 t^2 - 4gut \sin \theta + 4u^2 \sin^4 \theta = 0$$

This is a quadratic equation in  $t$

$$\Rightarrow t = \frac{4gu \sin \theta \pm \sqrt{16g^2 u^2 \sin^2 \theta - 16g^2 u^2 \sin^4 \theta}}{2g^2}$$

$$\Rightarrow t = \frac{4gu \sin \theta \pm \sqrt{16g^2 u^2 \sin^2 \theta (1 - \sin^2 \theta)}}{2g^2}$$

$$\Rightarrow t = \frac{4gu \sin \theta \pm \sqrt{16g^2 u^2 \sin^2 \theta \cos^2 \theta}}{2g^2}$$

$$\Rightarrow t = \frac{4gu \sin \theta \pm 4gu \sin \theta \cos \theta}{2g^2}$$

... divide top and bottom by  $2g$

$$\Rightarrow t = \frac{2u \sin \theta \pm 2u \sin \theta \cos \theta}{g}$$

$$\Rightarrow t_1 = \frac{2u \sin \theta + 2u \sin \theta \cos \theta}{g}$$

$$= \frac{2u \sin \theta (1 + \cos \theta)}{g}$$

and  $t_2 = \frac{2u \sin \theta - 2u \sin \theta \cos \theta}{g}$

$$= \frac{2u \sin \theta (1 - \cos \theta)}{g}$$

$$t_1 - t_2 = \frac{2u \sin \theta (1 + \cos \theta)}{g}$$

$$- \frac{2u \sin \theta (1 - \cos \theta)}{g}$$

$$= \frac{2u \sin \theta}{g} [1 + \cos \theta - (1 - \cos \theta)]$$

$$= \frac{2u \sin \theta}{g} (2 \cos \theta)$$

$$= \frac{2u [2 \sin \theta \cos \theta]}{g}$$

...  $2 \sin \theta \cos \theta = \sin 2\theta$

$$= \frac{2u \sin 2\theta}{g}$$

### Exercise 10D

Q. 1. (i) Speed at impact:

$$v^2 = u^2 + 2as$$

$$\Rightarrow v^2 = 0^2 + 2gh$$

$$\Rightarrow v = \sqrt{2gh}$$

Speed after impact =  $\frac{3}{4}\sqrt{2gh}$

**New Height:**

$$v^2 = u^2 + 2as$$

$$\Rightarrow 0^2 = \frac{9}{16}(2gh) + 2(-g)s$$

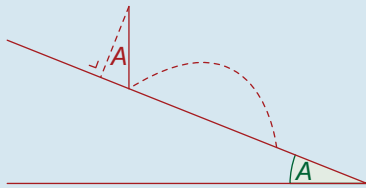
$$\Rightarrow s = \frac{9}{16}h$$

(ii) Each new height =  $\frac{9}{16}$ ths of the previous height

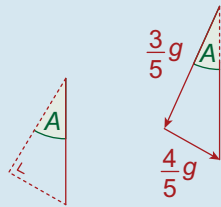
$$\therefore \text{Total distance} = 2h + \frac{9}{16}(2h) + \left(\frac{9}{16}\right)^2(2h) + \dots$$

=  $s_\infty$  of a G.P. with  
 $a = 2h, r = \frac{9}{16}$   
 $= \frac{2h}{1 - \frac{9}{16}} = \frac{32h}{7}$

Q. 2. (i)



**Gravity Resolved**



$$\vec{u} = u \sin A \vec{i} - u \cos A \vec{j}$$

$$= 20\left(\frac{4}{5}\right)\vec{i} - 20\left(\frac{3}{5}\right)\vec{j} = 16\vec{i} - 12\vec{j}$$

Before	(Mass)	After
$16\vec{i} - 12\vec{j}$	$M$	$16\vec{i} + p\vec{j}$

$$\frac{\text{NEW}}{\text{OLD}} = -e$$

$$\Rightarrow \frac{p}{-12} = \frac{-2}{3}$$

$$\Rightarrow p = 8$$

New initial speed =  $16\vec{i} + 8\vec{j}$

Find length of hop means find  $s_x$  when

$$s_y = 0$$

$$s_y = 0$$

$$\Rightarrow 8t - \frac{1}{2}\left(\frac{3}{5}g\right)t^2 = 0$$

$$\Rightarrow t = 0 \quad \text{OR} \quad t = \frac{80}{3g}$$

At  $t = \frac{80}{3g}$ ,

$$s_x = 16t + \frac{1}{2}\left(\frac{4}{5}g\right)t^2$$

$$= 16\left(\frac{80}{3g}\right) + \frac{1}{2}\left(\frac{4}{5}g\right)\left(\frac{6,400}{9g^2}\right)$$

$$= \frac{6,400}{9g} \text{ metres}$$

(ii) At  $t = \frac{80}{3g}$ ,

$$v_x = 16 + \frac{4}{5}gt$$

$$= 16 + \frac{4}{5}g\left(\frac{80}{3g}\right) = \frac{112}{3}$$

At  $t = \frac{80}{3g}$ ,

$$v_y = 8 - \frac{3}{5}gt$$

$$= 8 - \frac{3}{5}g\left(\frac{80}{3g}\right)$$

$$= -8$$

If  $L$  is the landing angle,  $\tan L = \frac{-v_y}{v_x}$

$$= \frac{8}{\frac{112}{3}}$$

$$= \frac{3}{14}$$

$$\Rightarrow \tan L = 0.2143$$

$$\Rightarrow L = 12^\circ 6' = 12^\circ \text{ (to nearest degree)}$$

**Q. 3. Before**

$$u \sin A \vec{i} - u \cos A \vec{j}$$

$$\frac{\text{NEW}}{\text{OLD}} = -e$$

$$\Rightarrow \frac{p}{-u \cos A} = \frac{-1}{4}$$

$$\Rightarrow p = \frac{1}{4}u \cos A$$

$$\text{Initial Speed} = u \sin A \vec{i} + \frac{1}{4}u \cos A \vec{j}$$

$$s_y = 0$$

$$\Rightarrow \frac{1}{4}u \cos A t - \frac{1}{2}g \cos A t^2 = 0$$

$$\Rightarrow t = 0 \quad \text{OR} \quad t = \frac{u}{2g}$$

$$\text{At } t = \frac{u}{2g},$$

$$s_x = u \sin A t + \frac{1}{2}g \sin A t^2$$

$$= u \sin A \left(\frac{u}{2g}\right) + \frac{1}{2}g \sin A \left(\frac{u^2}{4g^2}\right)$$

$$= \frac{5u^2 \sin A}{8g}$$

$$\text{At the first hop (when } t = \frac{u}{2g}\text{),}$$

$$v_x = u \sin A + g \sin A t$$

$$= u \sin A + g \sin A \left(\frac{u}{2g}\right)$$

$$= \frac{3}{2}u \sin A$$

$$v_y = \frac{1}{4}u \cos A - g \cos A t$$

$$= \frac{1}{4}u \cos A - g \cos A \left(\frac{u}{2g}\right)$$

$$= -\frac{1}{4}u \cos A$$

After the first hop,

$$v_x = \frac{3}{2}u \sin A \text{ and } v_y = -\frac{1}{4} \left(-\frac{1}{4}u \cos A\right)$$

$$= \frac{1}{16}u \cos A$$

Second hop:

$$\text{Initial speed} = \frac{3}{2}u \sin A \vec{i} + \frac{1}{16}u \cos A \vec{j}$$

$$s_y = 0$$

$$\Rightarrow \frac{1}{16}u \cos A t - \frac{1}{2}g \cos A t^2 = 0$$

$$\Rightarrow t = 0 \quad \text{OR} \quad t = \frac{u}{8g}$$

**After**

$$u \sin A \vec{i} + p \vec{j}$$

$$\text{At } t = \frac{u}{8g}$$

$$s_x = \frac{3}{2}u \sin A t + \frac{1}{2}g \sin A t^2$$

$$= \frac{3}{2}u \sin A \left(\frac{u}{8g}\right) + \frac{1}{2}g \sin A \left(\frac{u^2}{64g^2}\right)$$

$$= \frac{25u^2 \sin A}{128g}$$

**Q. 4.**  $v_x = 13u \left(\frac{12}{13}\right) - gt \sin 45^\circ$

$$= 12u - \frac{gt}{\sqrt{2}}$$

$$v_y = 13u \left(\frac{5}{13}\right) - gt \cos 45^\circ$$

$$= 5u - \frac{gt}{\sqrt{2}}$$

$$s_x = 13ut \left(\frac{12}{13}\right) - \frac{1}{2}gt^2 \sin 45^\circ$$

$$= 12ut - \frac{gt^2}{2\sqrt{2}}$$

$$s_y = 13ut \left(\frac{5}{13}\right) - \frac{1}{2}gt^2 \cos 45^\circ$$

$$= 5ut - \frac{gt^2}{2\sqrt{2}}$$

Need to find landing velocity, i.e. need to find  $v_x$  and  $v_y$  when  $s_y = 0$

$$5ut - \frac{gt^2}{2\sqrt{2}} = 0$$

$$\Rightarrow 10ut\sqrt{2} - gt^2 = 0$$

$$\Rightarrow t(10u\sqrt{2} - gt) = 0$$

$$\Rightarrow t = 0 \quad t = \frac{10u\sqrt{2}}{g}$$

Point of Projection                      Time of Flight

$$v_x = 12u - \frac{g}{\sqrt{2}} \left[\frac{10u\sqrt{2}}{g}\right]$$

$$= 12u - 10u$$

$$= 2u$$

$$v_y = 5u - \frac{g}{\sqrt{2}} \left[\frac{10u\sqrt{2}}{g}\right]$$

$$= 5u - 10u$$

$$= -5u$$

$$\Rightarrow \text{Velocity at landing} = 2u\vec{i} - 5u\vec{j}$$

$$\vec{j}\text{-velocity after impact} = -5(-e)$$

$$= 5e = 5\left(\frac{2}{5}\right)$$

$$= 2$$

$$\Rightarrow \text{Velocity after impact} = 2u\hat{i} + 2u\hat{j}$$

$\Rightarrow$  Particle rebounds at an angle of  $45^\circ$  to the inclined plane. Given that the plane is inclined at  $45^\circ$  to the horizontal, the particle rises vertically (at  $90^\circ$  to horizontal) from  $P$ .

**Q. 5.** (i)  $v_x = u \cos 60^\circ + gt \sin 30^\circ$   
 $= \frac{u}{2} + \frac{gt}{2}$   
 $v_y = u \sin 60^\circ - gt \cos 30^\circ$   
 $= \frac{u\sqrt{3}}{2} - \frac{gt\sqrt{3}}{2}$   
 $s_x = ut \cos 60^\circ + \frac{1}{2}gt^2 \sin 30^\circ$   
 $= \frac{ut}{2} - \frac{gt^2}{4}$   
 $s_y = ut \sin 60^\circ - \frac{1}{2}gt^2 \cos 30^\circ$   
 $= \frac{ut\sqrt{3}}{2} - \frac{gt^2\sqrt{3}}{4}$

Range:  $s_x$  when  $s_y = 0$

$$\frac{ut\sqrt{3}}{2} - \frac{gt^2\sqrt{3}}{4} = 0$$

$$\Rightarrow 2ut - gt^2 = 0$$

$$\Rightarrow t(2u - gt) = 0$$

$$\Rightarrow t = 0 \quad t = \frac{2u}{g}$$

Point of Projection
Time of Flight

$$\begin{aligned} \text{Range} &= \frac{u}{2} \left[ \frac{2u}{g} \right] + \frac{g}{4} \left[ \frac{4u^2}{g^2} \right] \\ &= \frac{u^2}{g} + \frac{u^2}{g} = \frac{2u^2}{g} \end{aligned}$$

(ii) Need to firstly find landing velocity, i.e.

$$v_x \text{ and } v_y \text{ when } t = \frac{2u}{g}$$

$$v_x = \frac{u}{2} + \frac{g}{2} \left[ \frac{2u}{g} \right] = \frac{u}{2} + u = \frac{3u}{2}$$

$$\begin{aligned} v_y &= \frac{u\sqrt{3}}{2} - \frac{g\sqrt{3}}{2} \left[ \frac{2u}{g} \right] = \frac{u\sqrt{3}}{2} - u\sqrt{3} \\ &= -\frac{u\sqrt{3}}{2} \end{aligned}$$

x-velocity is unchanged after impact

$$\text{New } y\text{-velocity} = \frac{eu\sqrt{3}}{2}$$

$\Rightarrow$  velocity at start of 2nd hop

$$= \frac{3u^2}{2}\hat{i} + \frac{eu\sqrt{3}}{2}\hat{j}$$

$$\begin{aligned} \text{Magnitude} &= \sqrt{\frac{9u^2}{4} + \frac{3e^2u^2}{4}} \\ &= \frac{u\sqrt{3}}{2} \sqrt{e^2 + 3} \end{aligned}$$

Let  $\theta$  be the angle at which the particle leaves the slope

$$\tan \theta = \frac{eu\sqrt{3}}{2} \times \frac{2}{3u} = \frac{e\sqrt{3}}{3} = \frac{e}{\sqrt{3}}$$

$$\Rightarrow \sin \theta = \frac{e}{\sqrt{e^2 + 3}} \text{ and } \cos \theta = \frac{\sqrt{3}}{\sqrt{e^2 + 3}}$$

Projectile equations are:

$$\begin{aligned} v_x &= \left[ \frac{u\sqrt{3}}{2} \sqrt{e^2 + 3} \right] \left[ \frac{\sqrt{3}}{\sqrt{e^2 + 3}} \right] \\ &\quad + gt \sin 30^\circ \\ &= \frac{3u}{2} + \frac{gt}{2} \end{aligned}$$

$$\begin{aligned} v_y &= \left[ \frac{u\sqrt{3}}{2} \sqrt{e^2 + 3} \right] \left[ \frac{e}{\sqrt{e^2 + 3}} \right] \\ &\quad - gt \cos 30^\circ \\ &= \frac{eu\sqrt{3}}{2} - \frac{gt\sqrt{3}}{2} \end{aligned}$$

$$\begin{aligned} s_x &= \left[ \frac{u\sqrt{3}}{2} \sqrt{e^2 + 3} \right] [t] \left[ \frac{\sqrt{3}}{\sqrt{e^2 + 3}} \right] \\ &\quad + \frac{1}{2}gt^2 \sin 30^\circ \\ &= \frac{3ut}{2} + \frac{gt^2}{4} \end{aligned}$$

$$\begin{aligned} s_y &= \left[ \frac{u\sqrt{3}}{2} \sqrt{e^2 + 3} \right] [t] \left[ \frac{e}{\sqrt{e^2 + 3}} \right] \\ &\quad - \frac{1}{2}gt^2 \cos 30^\circ \\ &= \frac{eut\sqrt{3}}{2} - \frac{gt^2\sqrt{3}}{4} \end{aligned}$$

Range:  $s_x$  when  $s_y = 0$

$$\frac{eut\sqrt{3}}{2} - \frac{gt^2\sqrt{3}}{4} = 0$$

$$\Rightarrow 2eut - gt^2 = 0$$

$$\Rightarrow t(2eu - gt) = 0$$

$$t = 0 \quad t = \frac{2eu}{g}$$

Point of Projection
Time of Flight

$$\begin{aligned} \text{Range} &= \frac{3u}{2} \left[ \frac{2eu}{g} \right] + \frac{g}{4} \left[ \frac{4e^2u^2}{g^2} \right] \\ &= \frac{3eu^2}{g} + \frac{e^2u^2}{g} \\ &= \frac{eu^2}{g} [3 + e] \end{aligned}$$

Range for 2nd hop = 2[Range for  
1st hop]

$$\Rightarrow \frac{eu^2}{g} [3 + e] = 2 \left[ \frac{2u^2}{g} \right]$$

... multiply by  $\frac{g}{u^2}$

$$\Rightarrow e(3 + e) = 4$$

$$\Rightarrow 3e + e^2 = 4$$

$$\Rightarrow e^2 + 3e - 4 = 0$$

$$\Rightarrow (e + 4)(e - 1) = 0$$

$$\Rightarrow e = \cancel{4} \quad e = 1 \quad \dots \quad 0 \leq e \leq 1$$

**Q. 6.** Fall from height  $h$ :

$$u = 0, \quad a = g, \quad s = h$$

$$v = \sqrt{u^2 + 2as} = \sqrt{2gh}$$

$\Rightarrow$  Strikes the plane at a speed of  $\sqrt{2gh}$

x-component of velocity at impact

$$= \sqrt{2gh} \cos 60^\circ = \frac{\sqrt{2gh}}{2} = \frac{\sqrt{gh}}{2}$$

y-component of velocity at impact

$$= -\sqrt{2gh} \sin 60^\circ = -\sqrt{2gh} \left( \frac{\sqrt{3}}{2} \right) = -\sqrt{\frac{3gh}{2}}$$

x-component is unchanged during impact

$$\text{y-component after impact} = \frac{1}{2} \sqrt{\frac{3gh}{2}}$$

Magnitude of velocity after impact

$$= \sqrt{\frac{gh}{2} + \frac{3gh}{8}} = \sqrt{\frac{4gh + 3gh}{8}}$$

$$= \sqrt{\frac{7gh}{8}}$$

Let  $\theta$  be the angle at which the particle leaves the plane

$$\begin{aligned} \tan \theta &= \frac{1}{2} \sqrt{\frac{3gh}{2}} \times \sqrt{\frac{2}{gh}} \\ &= \frac{\sqrt{3}}{2} \end{aligned}$$

$$\Rightarrow \sin \theta = \frac{\sqrt{3}}{\sqrt{7}} \quad \text{and} \quad \cos \theta = \frac{2}{\sqrt{7}}$$

Projectile equations are:

$$\begin{aligned} v_x &= \left[ \sqrt{\frac{7gh}{8}} \right] \left[ \frac{2}{\sqrt{7}} \right] + gt \sin 30^\circ \\ &= \sqrt{\frac{gh}{2}} + \frac{gt}{2} \end{aligned}$$

$$\begin{aligned} v_y &= \left[ \sqrt{\frac{7gh}{8}} \right] \left[ \frac{\sqrt{3}}{\sqrt{7}} \right] - gt \cos 30^\circ \\ &= \sqrt{\frac{3gh}{8}} - \frac{gt\sqrt{3}}{2} \end{aligned}$$

$$\begin{aligned} s_x &= \left[ \sqrt{\frac{7gh}{8}} \right] [t] \left[ \frac{2}{\sqrt{7}} \right] + \frac{1}{2} gt^2 \sin 30^\circ \\ &= t \sqrt{\frac{gh}{2}} + \frac{gt^2}{4} \end{aligned}$$

$$\begin{aligned} s_y &= \left[ \sqrt{\frac{7gh}{8}} \right] [t] \left[ \frac{\sqrt{3}}{\sqrt{7}} \right] - \frac{1}{2} gt^2 \cos 30^\circ \\ &= t \sqrt{\frac{3gh}{8}} - \frac{gt^2\sqrt{3}}{4} \end{aligned}$$

Range:  $s_x$  when  $s_y = 0$

$$t \sqrt{\frac{3gh}{8}} - \frac{gt^2\sqrt{3}}{4} = 0 \quad \dots \text{ multiply by } \frac{4\sqrt{8}}{\sqrt{3}}$$

$$\Rightarrow 4t\sqrt{gh} - gt^2\sqrt{8} = 0$$

$$\Rightarrow 4t\sqrt{gh} - 2gt^2\sqrt{2} = 0$$

$$\Rightarrow 2t\sqrt{gh} - gt^2\sqrt{2} = 0$$

$$\Rightarrow t\sqrt{2gh} - gt^2 = 0$$

$$\Rightarrow t(\sqrt{2gh} - gt) = 0$$

$$\Rightarrow t = 0 \quad \underbrace{t = \frac{\sqrt{2gh}}{g} = \sqrt{\frac{2h}{g}}}_{\text{Time of Flight}}$$

Point of Projection

$$\text{Range} = \left[ \sqrt{\frac{2h}{g}} \right] \sqrt{\frac{gh}{2}} + \frac{g}{4} \left[ \frac{2h}{g} \right]$$

$$\begin{aligned} \Rightarrow \text{Range} &= h + \frac{h}{2} \\ &= \frac{3h}{2} \end{aligned}$$